




Lesson 5

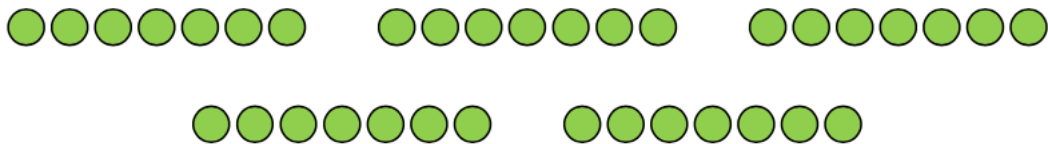
Starter:

Match the picture to the correct sentence.

	<div style="border: 1px solid black; padding: 5px; width: fit-content;"><p>3 lots of 10 + 3 lots of 1 is the same as 3 lots of 11</p></div>
	<div style="border: 1px solid black; padding: 5px; width: fit-content;"><p>2 lots of 10 + 2 lots of 2 is the same as 2 lots of 12</p></div>
	<div style="border: 1px solid black; padding: 5px; width: fit-content;"><p>2 lots of 10 + 2 lots of 1 is the same as 2 lots of 11</p></div>

1) Complete the calculations below.

$$7 \times 1 \times 5 = \square$$



$$9 \times 2 \times 2 = \square$$



$2) 3 \times 4 \times 5 =$

$3) 6 \times 2 \times 3 =$

$4) 8 \times 3 \times 3 =$

$5) 7 \times 2 \times 5 =$

$6) 9 \times 6 \times 2 =$

$7) 2 \times 9 \times 4 =$

$8) 8 \times 1 \times 5 =$

$9) 5 \times 6 \times 2 =$

True or false?

$8 \times 4 \times 3 = 92$ _____

$6 \times 3 \times 4 = 72$ _____

$9 \times 3 \times 2 = 66$ _____

$8 \times 4 \times 3 = 96$ _____

Tick the calculations that are correct.

$$7 \times 3 \times 6 = 120 \quad \square$$

$$6 \times 0 \times 6 = 36 \quad \square$$

$$8 \times 4 \times 3 = 96 \quad \square$$

$$2 \times 3 \times 4 = 32 \quad \square$$

$$2 \times 3 \times 6 = 36 \quad \square$$

$$3 \times 6 \times 7 = 125 \quad \square$$

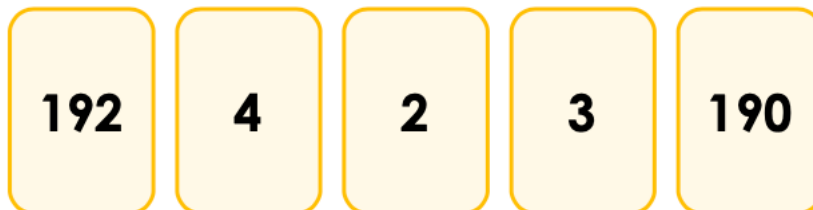
Challenge:

Match the calculations to their missing numbers.

$$4 \times 6 \times 8 = \square$$

$$9 \times \square \times 7 = 126$$

$$4 \times 8 \times \square = 128$$



True or false?

The missing number is 3.

$$5 \times \underline{\quad} \times 7 = 105$$

The missing number is 9.

$$\underline{\quad} \times 5 \times 4 = 160$$

