

Activity 11 - Measures

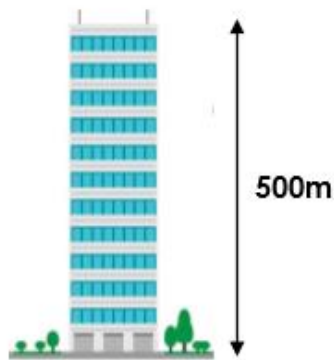
1 True or false?

$$40\text{cm} < 4\text{mm}$$

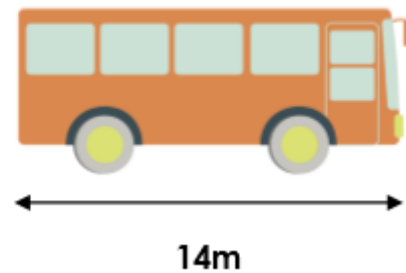
2 True or false?

$$200\text{cm} = 2\text{m}$$

3 Convert the height of the building to kilometres.



4 Convert the length of the bus to centimetres.



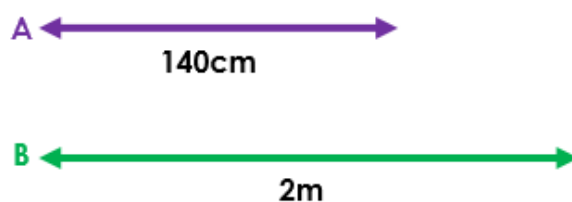
5 Fill in the missing symbol to make the statement correct.

$$3\text{m} \quad \square \quad 200\text{cm}$$

6 True or false?

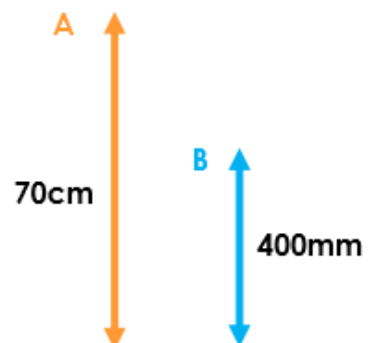
$$1,050\text{mm} < 1.5\text{m}$$

7 How much longer is line B than line A?



Give your answer in centimetres.

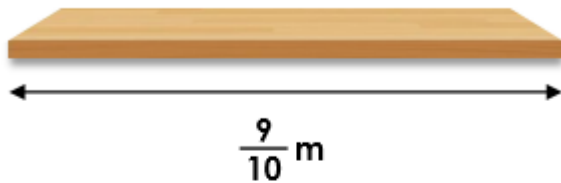
8 How much taller is line A than line B?



Give your answer in millimetres.

Challenge

4a. Holly needs to fit seven 12cm boxes on this shelf.



Will the boxes fit?
How many cm are spare/needed?



PS

5a. Amelia is converting millimetres to centimetres and metres using the table below.

| mm | cm | m |
|-------|-----|-----|
| 700 | 70 | 7 |
| 4,600 | 460 | 4.6 |
| 8,100 | 81 | 8.1 |

Explain and correct her mistakes.

