


Science- Plants Year 4

Label the parts of the flower.

petal, anther, stigma, style, ovary, sepal, filament





Write the function of each part of the flower.

Petal	
Anther	
Stigma	
Style	
Ovary	
Sepal	
Filament	

Challenges:

Which of these animals are pollinators?



How do you know?

---

---

Which colour flower do you think bees would visit the most? Why?

---

---

---

---

Design a poster to explain what 'pollination' is

